

## Friday 17<sup>th</sup> January – Maths homework



This week we have been working on counting money, making amounts in different ways and adding amounts.

### Activity 1 -Make these amounts in two different ways. Draw the coins/notes.



<b>54p</b>		
<b>95p</b>		
<b>70p</b>		
<b>£5 and 50p</b>		
<b>£10 and 60p</b>		
<b>£20 and 10p</b>		

**Activity 2 – work out how much you have spent! Use column method to find your answer.**



25p 	43p 	15p 	28p 	36p 
--	--	--	---	--

 + 



costs \_\_\_\_\_ p altogether.

 + 



costs \_\_\_\_\_ p altogether.

 + 



costs \_\_\_\_\_ p altogether.

 + 

costs \_\_\_\_\_ p altogether.

 + 

costs \_\_\_\_\_ p altogether.

 + 

costs \_\_\_\_\_ p altogether.



**Star challenge:** Visit a shop and practice using money and receiving change. You could also play this game - [Toy Shop Money Game \(GBP\) - Topmarks](#)