

## Maths homework

We have been looking at tens and ones in maths over the past week. You have a few different activities to complete. If you can't print the sheet please draw the models in your homework book.

Number: 24

tens	ones
2	4

Number: 18

tens	ones

Number: 59

tens	ones

Number: 44

tens	ones

Number: 35

tens	ones

Number: 80

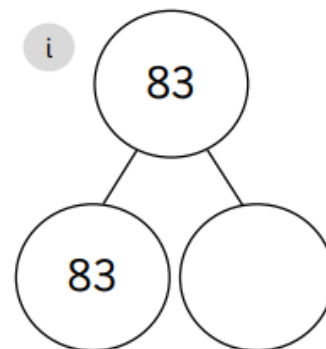
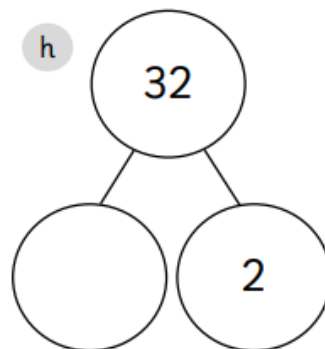
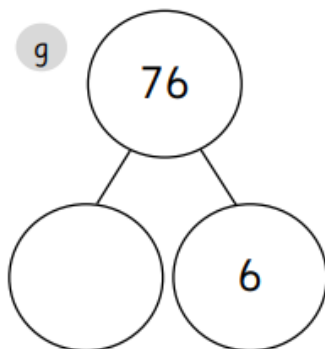
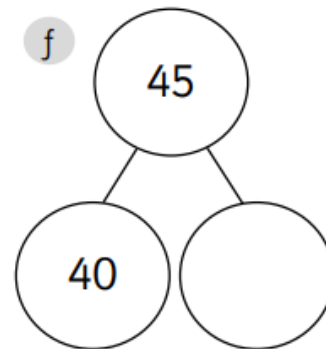
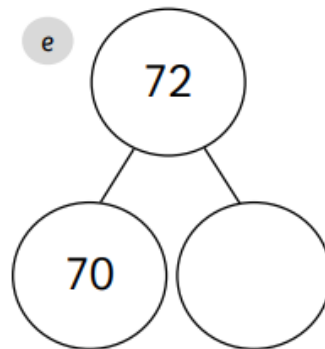
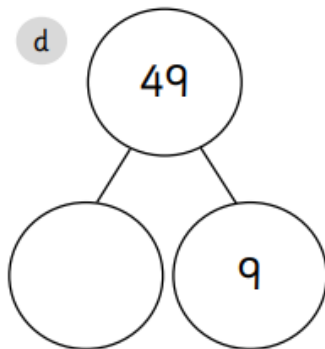
tens	ones

Number: 71

tens	ones

Number: 62

tens	ones



$$68 = 60 + 8$$

$$21 = \square + \square$$

$$37 = \square + \square$$

$$16 = \square + \square$$

$$55 = \square + \square$$



Enjoy playing these maths games:

[Bead Numbers \(topmarks.co.uk\)](https://www.topmarks.co.uk)

[Place Value Basketball - Dienes Game for 5 to 8 Year Olds \(topmarks.co.uk\)](https://www.topmarks.co.uk)