

Maths homework – 6th June

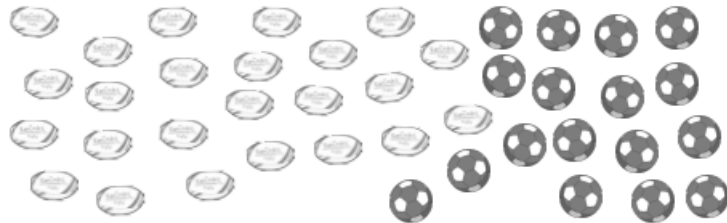
This week we will be revising skills from our maths work this year. Remember to show your working out. You can use column method or draw things to help you. You don't need to copy the whole question you can just write your answer.

6. Janice has 9 small dolls. There are 15 in a full set.



How many more dolls does she need to complete her set of 15 dolls?

7. Here are 41 balls: 24 rugby balls and 17 footballs.



Complete the addition and subtraction calculations below.

$$\square + \square = 41$$

$$\square - \square = 17$$

8. Match the name of the 3D shape to the correct shape.

Pyramid



Cylinder



Cube



9. Circle the odd numbers.

13 54 26 55 72
87 91

10. Here are 12 toy cars. Asjal takes $\frac{3}{4}$ of the cars to play with at his friend's house.



How many cars does Asjal take to his friend's house?

11. There is milk in this jug.



How much milk is in the jug?

 ml

12. Write the missing numbers in this sequence.

67	57	47		27	
----	----	----	--	----	--

13. Draw an arrow to show 75 on the number line.



14. Cakes are sold in packs of ten.



How many cakes are in the picture above?

15. Complete this calculation.

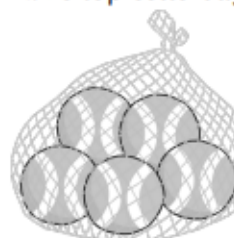
$$\square \div 4 = 5$$

16. Circle the longer time interval.

1 hour

65 minutes

17. A shop sells bags of tennis balls in packs of 5.




In a week the shop sells 35 balls.

How many packs of tennis balls are sold?

18. Here are some 2D shapes:



triangle



oblong



square



hexagon

Write the name of each shape in the correct column below.

Has 4 sides	Does not have four sides



Practise your maths skills by playing these games:

[Hit the Button - Quick fire maths practise for 6-11 year olds \(topmarks.co.uk\)](https://www.topmarks.co.uk/Hit-the-Button)

[Mental Maths Train - A Four Operations Game \(topmarks.co.uk\)](https://www.topmarks.co.uk/Mental-Maths-Train)

[Toy Shop Money Game \(GBP\) - Topmarks](https://www.topmarks.co.uk/Toy-Shop-Money-Game)