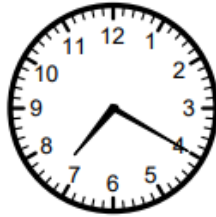


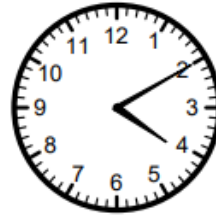
Maths Homework


We have been working hard in school to learn how to tell the time. Read the clocks below and write down the time they show. Remember to think carefully about whether it is minutes past the hour or minutes to the next hour.







































Play this game to check your understanding! [Hickory Dickory Clock: A tell the time game \(ictgames.com\)](https://www.ictgames.com/HickoryDickoryClock.html)